



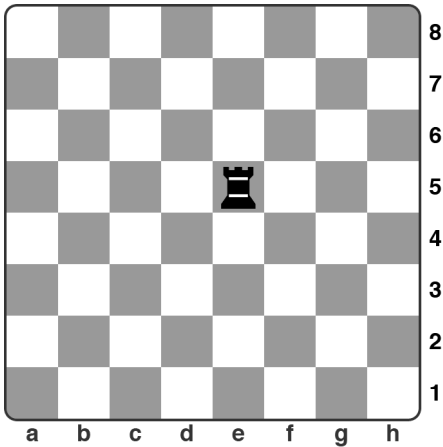
1. Define these terms:

- a) pin _____
- _____
- b) chain _____
- _____
- c) check _____
- _____
- d) rank _____
- _____

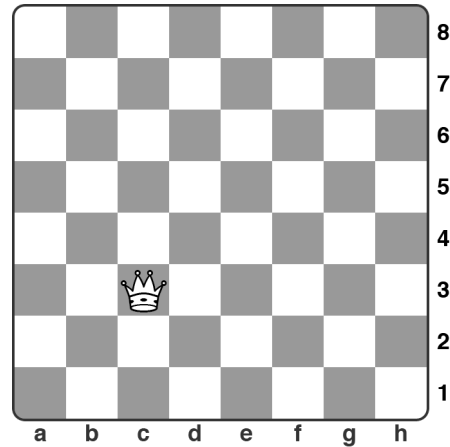
/4

2. Write the coordinate that:


a) the Rook is on:



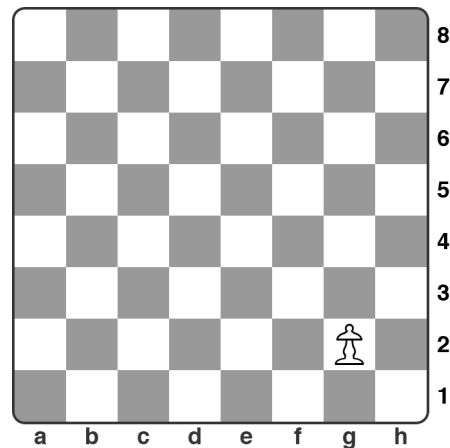
b) the Queen is on:



c) the Bishop is on:



d) the pawn is on:




/4

3. Circle all the pieces:

a) that the White Queen can take?

ADVANCED:


Which is the best piece to take?



b) that the White Rook can take?

ADVANCED:


Which is the best piece to take?



c) that the White Bishop can take?

ADVANCED:


Which is the best piece to take?



d) that the White King can take?

ADVANCED:


Which is the best piece to take?



Score /4
Advanced Score /4

4. Circle the answer which best describes this position:

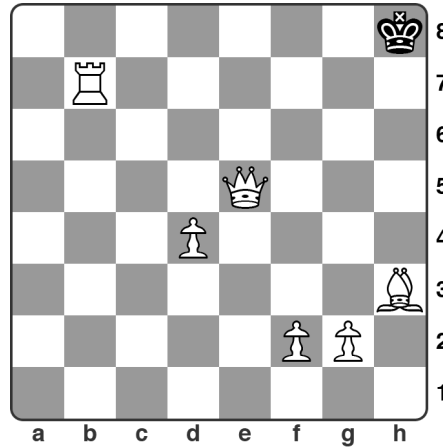
- a) Checkmate
 - b) Check
- and Black's move should be
(draw an arrow to show the move)



/2

5. Circle the answer which best describes this position:


- a) Checkmate
 - b) Check
- and Black's move should be
(draw an arrow to show the move)



/2

6. Circle the answer which best describes this position:


- a) Checkmate
 - b) Check
- and Black's move should be
(draw an arrow to show the move)



/2

7. Circle the answer which best describes this position:

- a) Checkmate
 - b) Check
- and Black's move should be
(draw an arrow to show the move)




/2

8. Is White allowed to do the special move castling in this position?

Yes

No




/1

9. Is White allowed to do the special move castling in this position?

Yes

No



/1

Total score /22

Advanced score /4